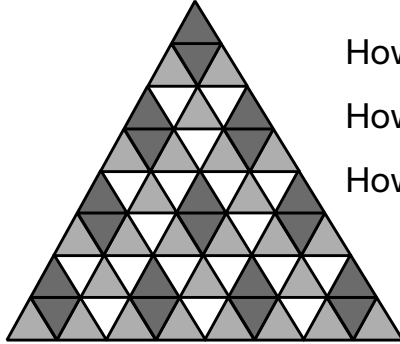



# How Many Are There?


Use addition, subtraction, or multiplication to find the number of each shape in the patterns in the figures below. Then explain how you found your answers.

**Patterns**

1.



How many  are in the pattern? \_\_\_\_\_

How many  are in the pattern? \_\_\_\_\_

How many  are in the pattern? \_\_\_\_\_

How did you find the number of each shape in the pattern?

---





---




---

2.



How many  are in the pattern? \_\_\_\_\_

How many  are in the pattern? \_\_\_\_\_

How many  are in the pattern? \_\_\_\_\_

How did you find the number of each shape in the pattern?

---



---



---